

# BUDHA DAL PUBLIC SCHOOL, PATIALA

Term – 2

Subject – EVS

Session – 2022-2023

Name – \_\_\_\_\_ Class – 1

Section –

Roll No – \_\_\_\_\_ Set – B

Date – 16.3.23

Time –

M.M. – 60

## Section-A (Multiple Choice)

12 marks

Choose the correct answer :

1. Which type of wheel is shown in the picture?



- a) turbine (b) giant wheel  
c) charkha (d) water wheel

2. Which of the following sets consists of big animals?

- a) cat, lion, ant (b) tiger, rabbit, cat  
c) lion, elephant, tiger (d) cat, rabbit, rat

3. Ronit wants to clean the house. Which of the following things should he **NOT** use?

- a) broom (b) threads and needle  
c) gloves (d) mop

4. In which of the following seasons should we drink a lot of this?



- a) spring (b) monsoon  
c) winter (d) summer

5. Which of the following should Rakhi use to serve food to her guests?



6. Which of the following is not a raw food?



7. Which of the following things was used to make the first wheel?

- a) wood      (b) stone      (c) clay      (d) rubber

8. Which of the following animal lives in the jungle.



- a) lion      (b) goat      (c) dog      (d) horse

9. Which of the following may NOT be found in some kinds of houses?

- a) roof      (b) window      (c) door      (d) balcony

10. Which of the following pictures show that the weather is hot?



- a) rainy      (b) windy      (c) snow      (d) hot sun

11. At what time of the day do we have breakfast?

- a) morning      (b) afternoon      (c) evening      (d) night

12. For which of the following purpose is this used?



- a) to boil and serve food      (b) to boil and steam food  
c) to fry and serve food      (d) to fry food only

Fill in the blanks using the correct word from the brackets :

13. We eat, \_\_\_\_\_ and sleep in our house. (fly / play)

14. Special climates that are present in different parts of a year are called \_\_\_\_\_  
(seasons / months)

15. This is a picture of a \_\_\_\_\_ wheel. (stone / rubber)



16. We have lunch in the \_\_\_\_\_. (afternoon / night)

17. A \_\_\_\_\_ wheel is shown in the picture given below : (wooden / stone)



18. The animal in the picture below is a (hyena / duck)



Answer the following questions in a word or a sentence:

19. In which room of our house do we usually keep our clothes and toys?

20. Which vehicle is shown in the picture.



21. Merry lives in a house which has two bedrooms, and one drawing room. How many rooms are there in her house?

Write Yes (Y) or No (N) :

22. Different seasons have different climates.

23. It rains a lot during summer.

24. Plants grow new flowers and leaves in the summer season.

25. Fruits protect us from illness.

26. Early humans used wheels to make carts.

27. Fish have four legs.

28. A clean house keeps us healthy.

Name the following :

29. The thing shown in the picture.



30. The weather of a place that stays for a long time.

31. The thing which people made first using the wheel.

32. The domestic animals that live inside our houses.

\_\_\_\_\_



\_\_\_\_\_

\_\_\_\_\_



Section – C (Graphic Organizers)

16 M

33. Choose the correct words from the brackets to complete the following table : 4 M  
(day / night / bat / elephant )

Picture	Name of the animal	Type of animal
	_____	It is a _____ animal.
	_____	It is a _____ animal.

34. Choose the correct words from the brackets to complete the following table : 4 M  
(bathroom / bedroom / sleep/ bath)

Rooms and their uses	
	We _____ in the _____.
	We have a _____ in the _____.

32. The domestic animals that live inside our houses.



\_\_\_\_\_

\_\_\_\_\_



Section - C (Graphic Organizers)

16 M

33. Choose the correct words from the brackets to complete the following table : 4 M  
(day / night / bat / elephant )

Picture	Name of the animal	Type of animal
	_____ _____	It is a _____ animal.
	_____ _____	It is a _____ animal.

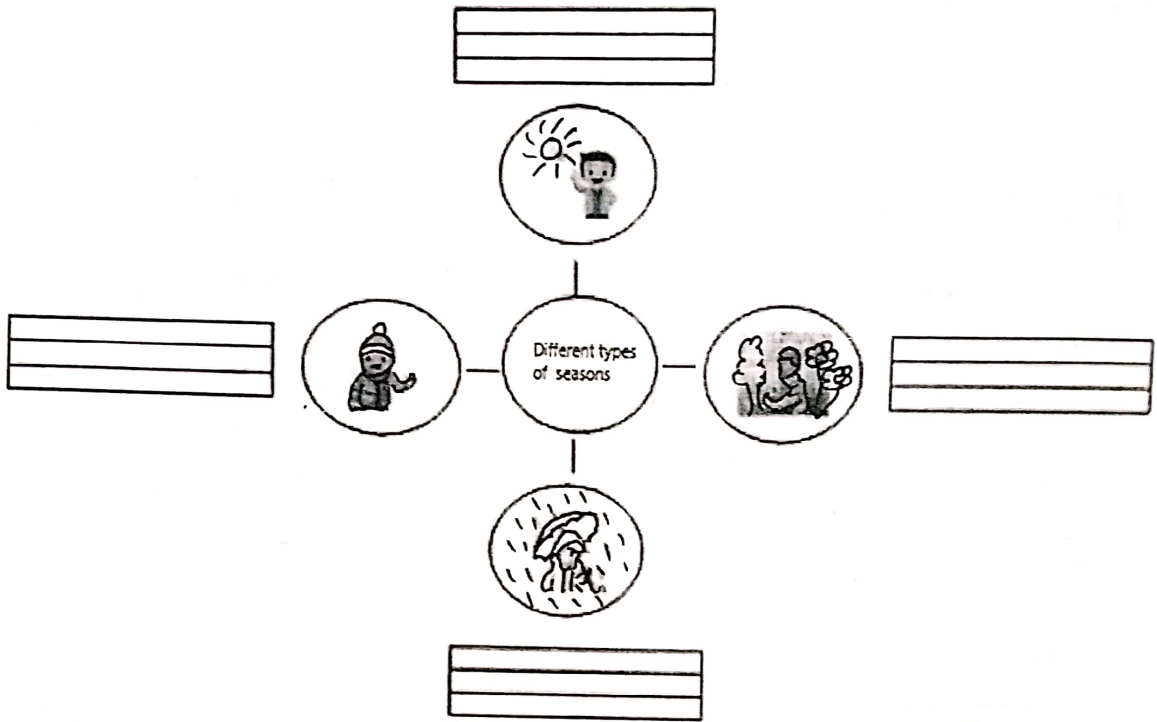
34. Choose the correct words from the brackets to complete the following table : 4 M  
(bathroom / bedroom / sleep/ bath)

Rooms and their uses	
	We _____ in the _____ _____.
	We have a _____ in the _____.

35. Choose the correct words from the brackets to complete the chart.

4 M


(Rainy / Summer / Winter / spring)



36. Choose the correct words from the brackets to complete the table.

4 M

(kills / safe / germs / eat)

Why we cook food	
 Cooked food	It _____ the _____ _____ in the food.
	It makes food _____ to _____.

37. Give reasons :


We live in house because :

Handwriting practice lines for question 37, consisting of three sets of three horizontal lines each.

38. Rick saw a dog and a hyena on television. Which one of these is a wild animal and which one is a pet animal?

Handwriting practice lines for question 38, consisting of three sets of three horizontal lines each.

39. Which food items are shown in the given picture? Are they cooked or raw?



Handwriting practice lines for question 39, consisting of two sets of three horizontal lines each.

40. What are farm animals? Give one example.

Handwriting practice lines for question 40, consisting of three sets of three horizontal lines each.



41. What happens to the leaves of trees during the autumn season?



**Section – E (Diagram based questions)**

**2 M**

42. Draw a house and label the door and window.